



Fact Family

Use the bar model to help you write each fact family.




Fact Family


$4+7=11$	



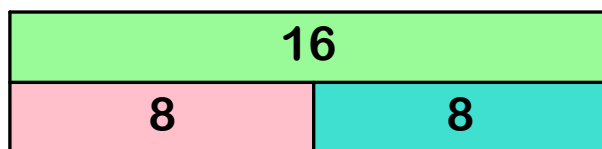
Fact Family



Fact Family



Fact Family



Fact Family


Fact Family

Use the bar model to help you write each fact family.



Fact Family


$9+6=15$	



Fact Family



Fact Family



Fact Family



Fact Family
